

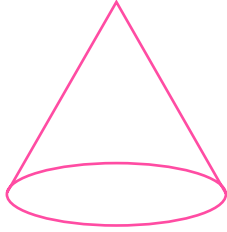


NAME \_\_\_\_\_ DATE \_\_\_\_\_

## COUNT EDGES, CORNERS AND FACES

Understanding the mathematical terminology and concepts in 3D shapes.

1) How many vertices does this figure have?

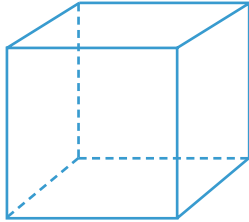


1

4

2

2) How many edges does this figure have?

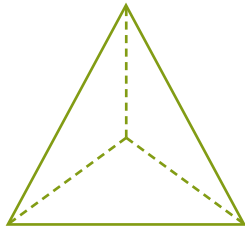


11

10

12

3) How many faces does this figure have?

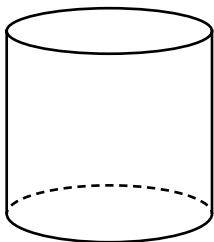


4

5

3

4) How many edges does this figure have?



4

2

3