



NAME _____ DATE _____

COUNT EDGES, CORNERS AND FACES

Understanding the mathematical terminology and concepts in 3D shapes.

1) How many edges does this figure have?

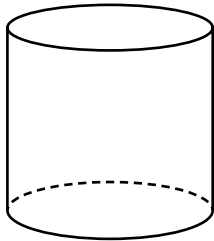


10

11

12

2) How many edges does this figure have?

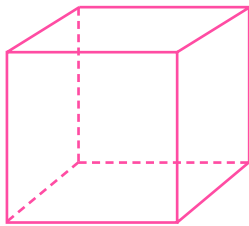


3

2

4

3) How many faces does this figure have?

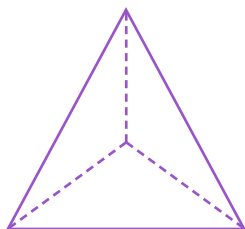


8

6

10

4) How many vertices does this figure have?



5

4

1