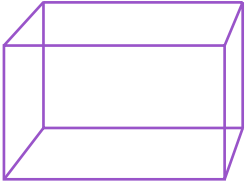





NAME _____ DATE _____

IDENTIFY 2D AND 3D SHAPES


Learn different 2d and 3d shaped figures.




Rectangular Prism



Triangle



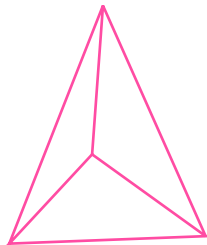
Cylinder




Rhombus



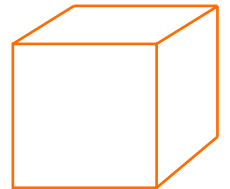
Rectangle



Triangular Pyramid



Circle



Cube

2D Shapes

3D Shapes
