




NAME \_\_\_\_\_ DATE \_\_\_\_\_

## IDENTIFY 2-DIMENSIONAL SHAPES



Identify the right one.

1. Which of these is trapezium?





---

2. Which of these is parallelogram?



---

3. Which of these is a rhombus?



---

4. Which of these is a pentagon?

