



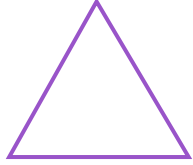
NAME _____

DATE _____

IDENTIFY SIDES AND CORNERS

Write the number of corners and sides that each shape has, and match the shape to its name.

1)



___ corners.

___ straight lines.

Square

2)

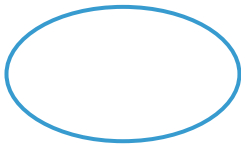


___ corners.

___ straight lines.

Rhombus

3)




___ corners.

___ straight lines.

Triangle

4)



___ corners.

___ straight lines.

Oval