



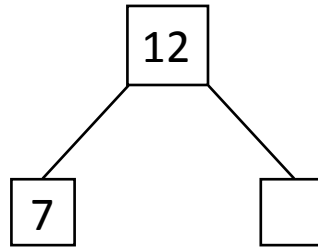

NAME \_\_\_\_\_

DATE \_\_\_\_\_

## MIXED OPERATIONS

Read the following questions and fill the number bond. Write an addition and subtraction number sentences that match the story.

- 1) My father brought 12 bananas to home. My family members ate 7 bananas. How many bananas are left?

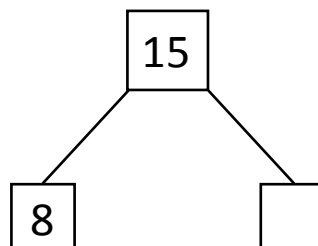



$$\boxed{7} \oplus \boxed{\phantom{00}} = \boxed{12}$$

$$\boxed{12} \ominus \boxed{7} = \boxed{\phantom{00}}$$

\_\_ bananas are left.

- 2) Out of 15 marks in an English subject, Carlos scored 8 marks. How many more marks Carlos has to score to get full marks?

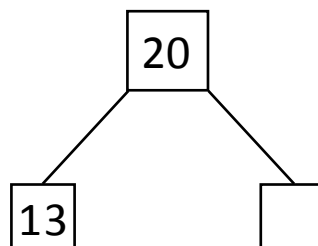


$$\boxed{8} \oplus \boxed{\phantom{00}} = \boxed{15}$$

$$\boxed{15} \ominus \boxed{8} = \boxed{\phantom{00}}$$

Carlos has to secure \_\_ more marks to get full marks.

- 3) There are 20 mangoes in a basket. 13 mangoes have been sold. How many mangoes are left in the basket?



$$\boxed{13} \oplus \boxed{\phantom{00}} = \boxed{20}$$

$$\boxed{20} \ominus \boxed{13} = \boxed{\phantom{00}}$$

Number of mangoes left \_\_.