



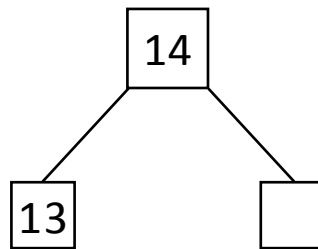
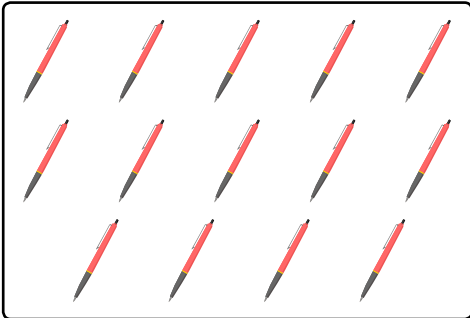
NAME \_\_\_\_\_

DATE \_\_\_\_\_

## MIXED OPERATIONS

Read the following questions and fill the number bond. Write an addition and subtraction number sentences that match the story.

- 1) There are 14 pens in a packet and 13 pens are already used. How many pens are left in the packet?

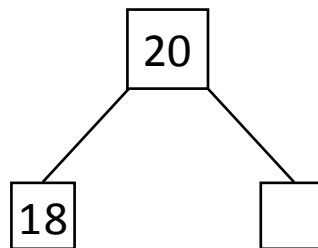



$$\boxed{13} \oplus \boxed{\phantom{00}} = \boxed{14}$$

$$\boxed{14} \ominus \boxed{13} = \boxed{\phantom{00}}$$

Number of pens left in the packet \_\_\_\_.

- 2) In a 20 overs game, England won in 18 overs. How many overs are left?

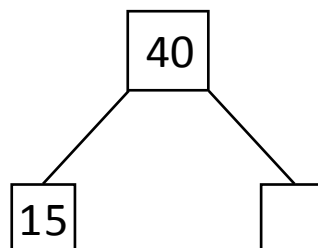
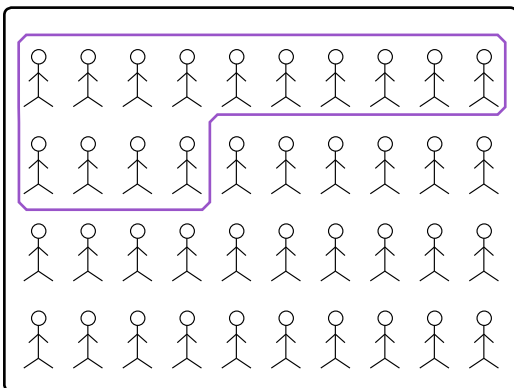


$$\boxed{18} \oplus \boxed{\phantom{00}} = \boxed{20}$$

$$\boxed{20} \ominus \boxed{18} = \boxed{\phantom{00}}$$

Number of overs left \_\_\_\_.

- 3) There are 40 boys in a play ground. 15 boys are watching the game and the remaining are playing the game. How many boys are playing the game?



$$\boxed{15} \oplus \boxed{\phantom{00}} = \boxed{40}$$

$$\boxed{40} \ominus \boxed{15} = \boxed{\phantom{00}}$$

Number of boys playing in the ground \_\_\_\_.