

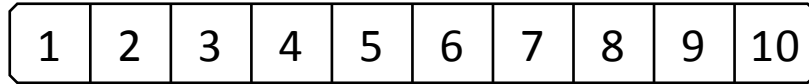


NAME \_\_\_\_\_

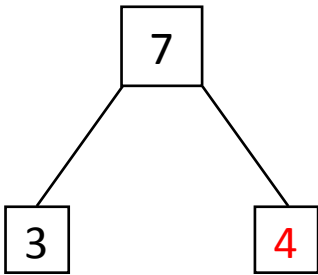
DATE \_\_\_\_\_

## MIXED OPERATIONS

Write an addition and subtraction number sentence for the number bond. You may use the number path to solve.



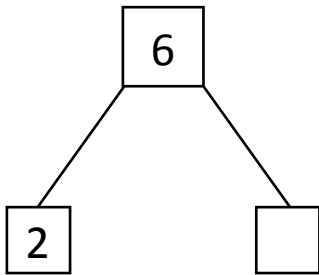
Example:



$$3 + 4 = 7$$

$$7 - 3 = 4$$

a)

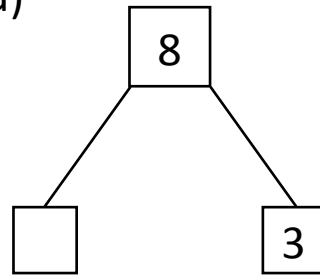



---



---

d)

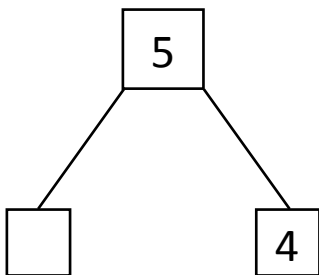



---



---

b)

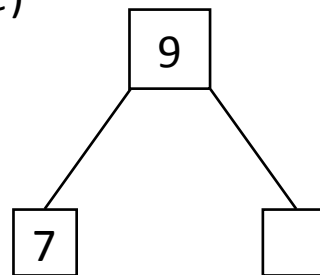



---



---

e)

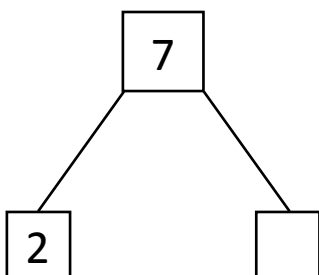



---



---

c)

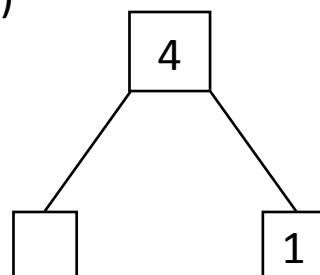



---



---

f)




---



---