



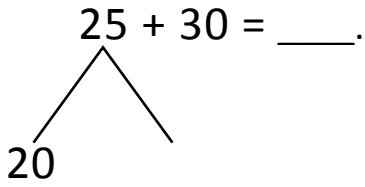
NAME _____ DATE _____

NUMBER BONDS AND ARROW WAY METHODS

Add the following expressions using number bonds and arrow way methods.

a) $25 + 30 = \underline{\quad}$.


Number bond:



$$20 + \underline{\quad} = 50$$

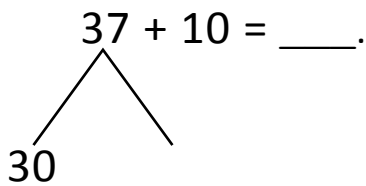
$$50 + 5 = \underline{\quad}.$$

Arrow way:



b) $37 + 10 = \underline{\quad}$.

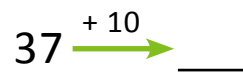
Number bond:



$$30 + 10 = \underline{\quad}.$$

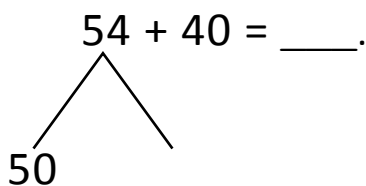
$$40 + 7 = \underline{\quad}.$$

Arrow way:



c) $54 + 40 = \underline{\quad}$.

Number bond:



$$50 + 40 = \underline{\quad}.$$

$$90 + \underline{\quad} = 94$$

Arrow way:

