



NAME \_\_\_\_\_

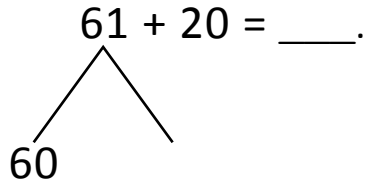
DATE \_\_\_\_\_

## NUMBER BONDS AND ARROW WAY METHODS

Add or subtract the following expressions using number bonds and arrow way methods.

a)  $61 + 20 = \underline{\quad}$ .

Number bond:



$\underline{\quad} + 20 = 80$

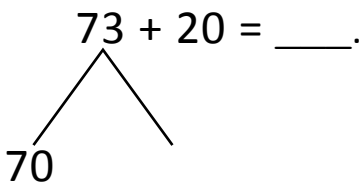
$80 + \underline{\quad} = 81$

Arrow way:



b)  $73 + 20 = \underline{\quad}$ .

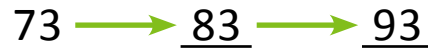
Number bond:



$70 + 20 = \underline{\quad}$ .

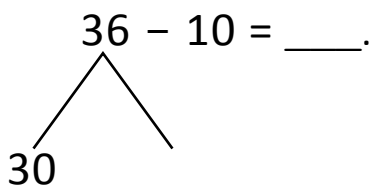
$90 + 3 = \underline{\quad}$ .

Arrow way:



c)  $36 - 10 = \underline{\quad}$ .

Number bond:



$30 - 10 = \underline{\quad}$ .

$20 + \underline{\quad} = 26$

Arrow way:

