



NAME _____

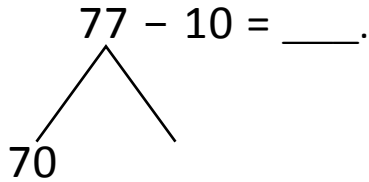
DATE _____

NUMBER BONDS AND ARROW WAY METHODS

Add or subtract the following expressions using number bonds and arrow way methods.

a) $77 - 10 = \underline{\quad}$.

Number bond:



$$70 - \underline{\quad} = 60$$

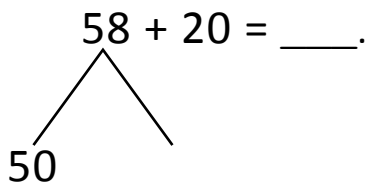
$$60 + \underline{\quad} = 67$$

Arrow way:



b) $58 + 20 = \underline{\quad}$.

Number bond:



$$50 + \underline{\quad} = 70$$

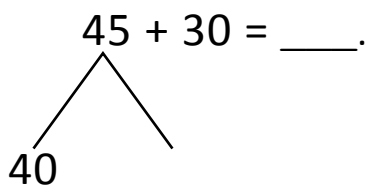
$$70 + 8 = \underline{\quad}$$

Arrow way:



c) $45 + 30 = \underline{\quad}$.

Number bond:



$$40 + 30 = \underline{\quad}$$

$$70 + \underline{\quad} = 75$$

Arrow way:

