



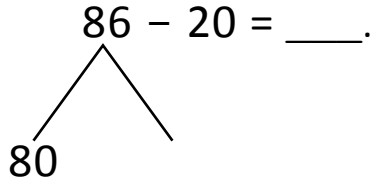
NAME _____ DATE _____

NUMBER BONDS AND ARROW WAY METHODS

Add or subtract the following expressions using number bonds and arrow way methods.

a) $86 - 20 = \underline{\quad}$.

Number bond:



$86 - 20 = \underline{\quad}$.

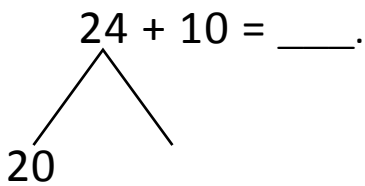
$60 + \underline{\quad} = 66$

Arrow way:



b) $24 + 10 = \underline{\quad}$.

Number bond:



$20 + 10 = \underline{\quad}$.

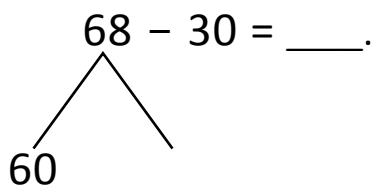
$30 + 4 = \underline{\quad}$.

Arrow way:



c) $68 - 30 = \underline{\quad}$.

Number bond:



$60 - 30 = \underline{\quad}$.

$30 + \underline{\quad} = 38$

Arrow way:

