



NAME _____


DATE _____

REPRESENTING COINS

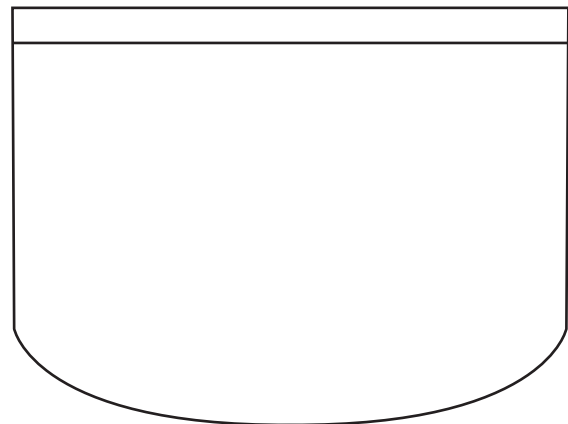
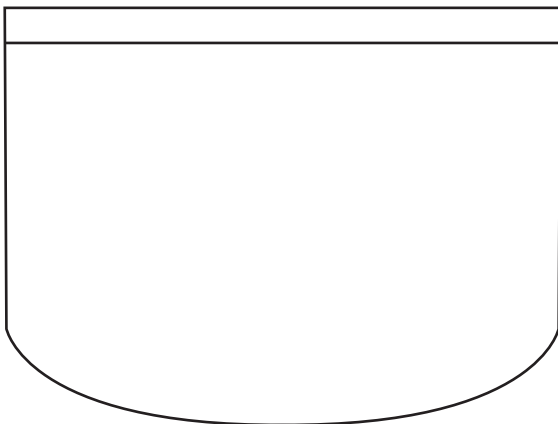
Coins, Its quantities in value equal to more / less comparing with other coins.

Example:

Jake has 10 cents in his pocket. One of his coins is a nickel. Draw coins to show two different ways he could have 10 cents with the coins he has in his pocket.



- 1) Toby has 15 cents in his pocket. One of his coins is a dime. Draw coins to show two different ways he could have 15 cents with the coins he has in his pocket.



- 2) Drake has 5 cents in his pocket. Draw coins to show two different ways he could have 5 cents with the coins he has in his pocket.

