



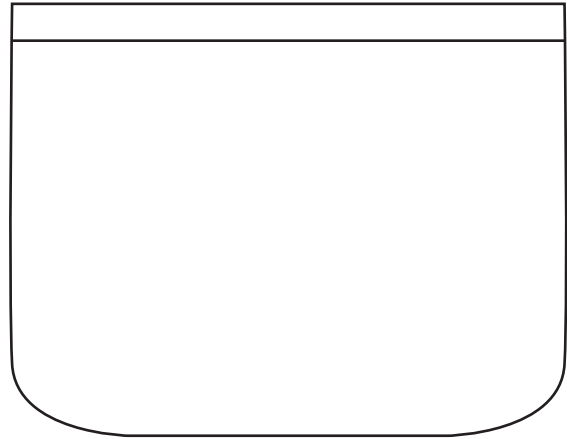
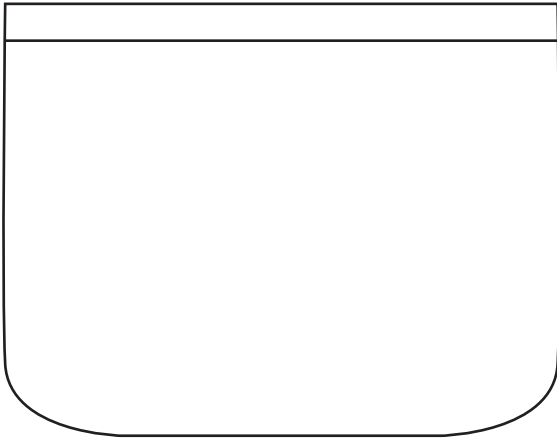
NAME _____

DATE _____



REPRESENTING COINS

Coins, Its quantities in value equal to more / less comparing with other coins.

- 1) Anna has 12 cents in his pocket. She don't have a dime in her pocket. Draw coins to show two different ways she could have 12 cents with the coins she has in his pocket.



- 2) Ben has 18 cents in his pocket. One of his coins is a dime. Draw coins to show two different ways he could have 18 cents with the coins he has in his pocket.



- 3) Mark has 14 cents in his pocket. One of his coins is a nickel. Draw coins to show two different ways he could have 14 cents with the coins he has in his pocket.

