




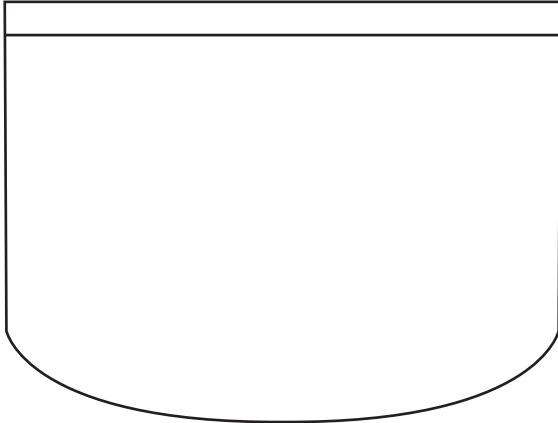
NAME _____

DATE _____

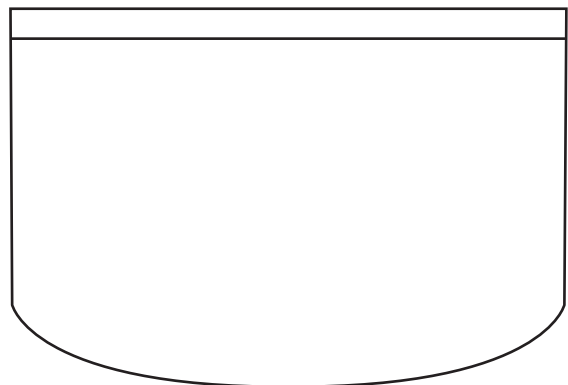
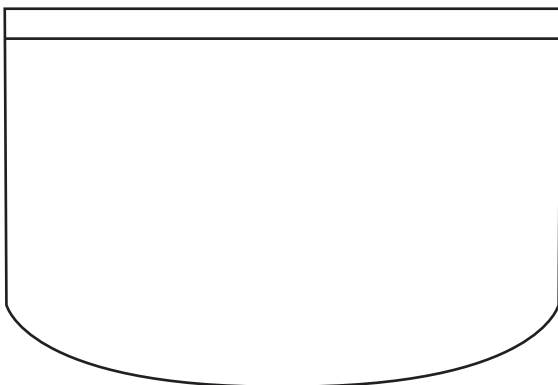
REPRESENTING COINS

Coins, Its quantities in value equal to more / less comparing with other coins.

- 1) Harry has 8 cents in his pocket. He has 3 cents in his pocket. Draw more coins to show two different ways she could have 8 cents with the coins he has in his pocket.



- 2) Kitty has 20 cents in her pocket. She has one dime and one nickel and some other coins. Draw more coins to show two different ways she could have 20 cents with the coins she has in her pocket.



- 3) Mark has 16 cents in his pocket. He has one dime and some other coins. Draw more coins to show two different ways he could have 16 cents with the coins he has in his pocket.

