

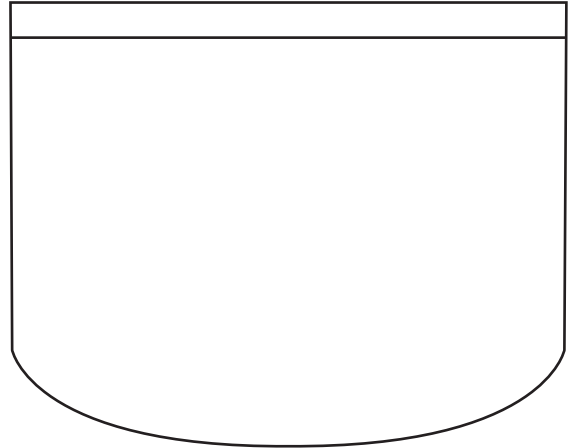
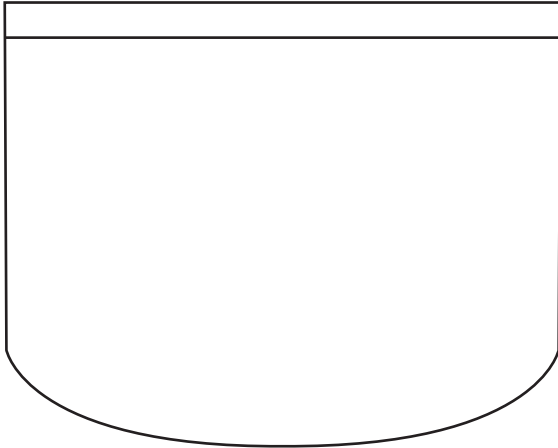


NAME _____ DATE _____

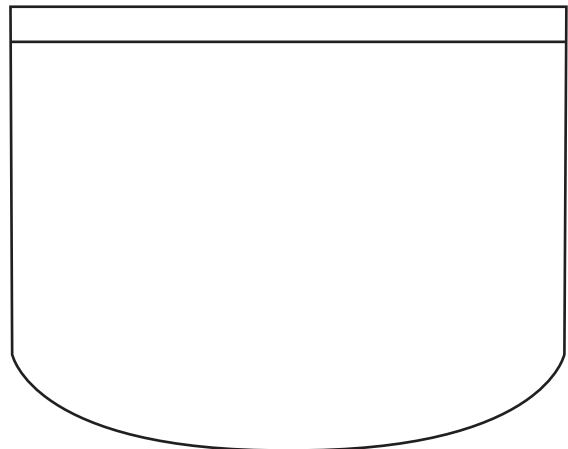
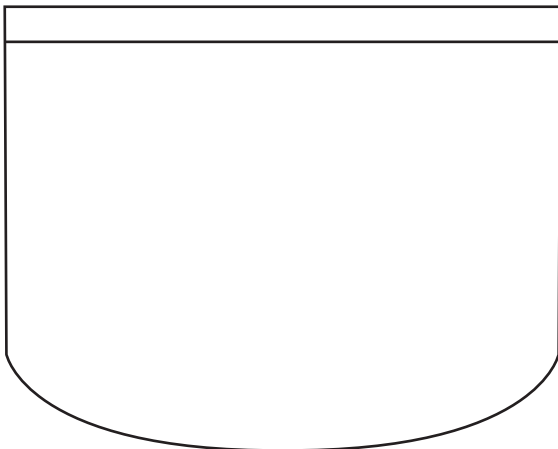
REPRESENTING COINS

Coins, Its quantities in value equal to more / less comparing with other coins.

- 1) Benny has 11 cents in his pocket. One of his coins is a nickel. Draw coins to show two different ways he could have 11 cents with the coins he has in his pocket.



- 2) Jorge has 19 cents in his pocket. He has two nickels and some other coins. Draw coins to show two different ways he could have 19 cents with the coins he has in his pocket.



- 3) Jane has 6 cents in his pocket. One of his coins is a nickel. Draw coins to show two different ways he could have 6 cents with the coins he has in his pocket.

