



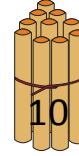
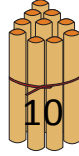
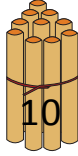
NAME _____

DATE _____

COUNTING THE NUMBERS

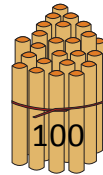
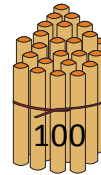
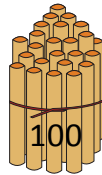
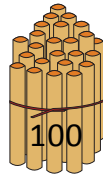

Counting the numbers by making the bundles 1's, 10's and 100's.

a) Bundles of 10's.



3 tens = ____.

b) Bundles of 100's.



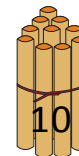
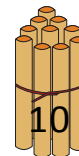
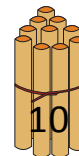
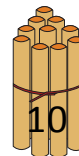
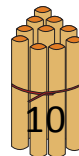
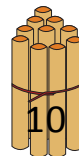
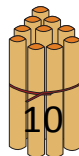
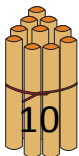
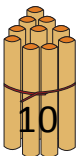
5 hundreds = ____.

c) Bundles of 1's.



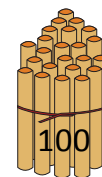
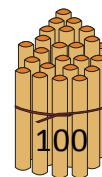
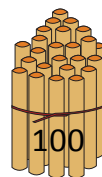


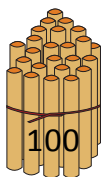

7 ones = ____.

d) Bundles of 10's.



9 tens = ____.

e) Bundles of 100's.



7 hundreds = ____.