





NAME _____

DATE _____

LEFT, MIDDLE AND RIGHT

Fill the blanks with correct figure name.

Example:





The star is to the right of rectangle.

The rectangle is to the right of triangle.

The rectangle is to the left of star.

The triangle is to the left of rectangle.

1)



The _____ is to the right of circle.

The _____ is to the left of rhombus.

The _____ is to the right of rhombus.

The _____ is to the left of square.

2)



The _____ is to the left of oval.

The _____ is to the right of parallelogram.

The _____ is to the right of oval.

The _____ is to the left of pentagon.