






NAME _____

DATE _____

LEFT, MIDDLE AND RIGHT

Fill the blanks with correct figure name.

1)






The _____ is to the right of square.

The _____ is to the left of hexagon.

The _____ is to the right of triangle.

The _____ is to the left of square.

2)





The _____ is to the right of rhombus.

The _____ is to the right of parallelogram.

The _____ is to the left of pentagon.

The _____ is to the left of rhombus.

3)



The _____ is to the left of rectangle.

The _____ is to the left of circle.

The _____ is to the right of oval.

The _____ is to the right of circle.