



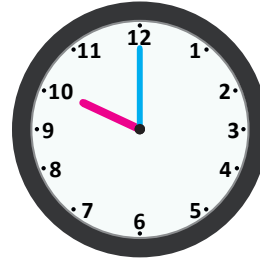
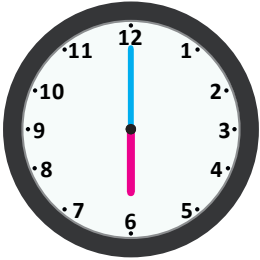
NAME \_\_\_\_\_

DATE \_\_\_\_\_

## READING CLOCKS

Select the clock that shows correct time. Write the times for the other two clocks on the lines.

1. Tick (✓) the clock that shows 8 O' clock.



---

---

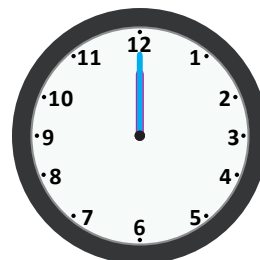
2. Tick (✓) the clock that shows half past 9 O' clock.



---

---

3. Tick (✓) the clock that shows 6 O' clock.



---

---