



NAME _____

DATE _____

MATCH THE FOLLOWING

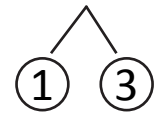
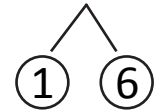
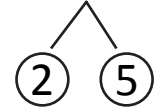
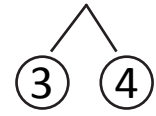
Match the number sentences to the bonds you used to help you make a ten.

1. a) $8 + 7 = \underline{\quad}$

b) $\underline{\quad} = 7 + 6$

c) $4 + 7 = \underline{\quad}$

d) $\underline{\quad} = 9 + 7$

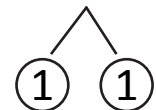
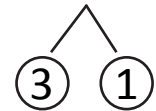
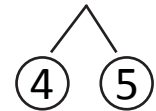
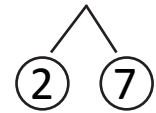


2. a) $2 + 9 = \underline{\quad}$

b) $\underline{\quad} = 4 + 9$

c) $6 + 9 = \underline{\quad}$

d) $\underline{\quad} = 8 + 9$



3. a) $3 + 8 = \underline{\quad}$

b) $\underline{\quad} = 5 + 7$

c) $4 + 9 = \underline{\quad}$

d) $\underline{\quad} = 6 + 6$

