



NAME _____

DATE _____

MATCH THE FOLLOWING

Match the following.

i)

$$8 + _ = 17$$

a)

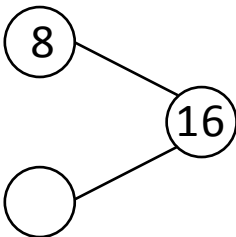
15

ii) Mark caught 5 fish.
Jack caught 8 fish.
How many fish
they caught
altogether?

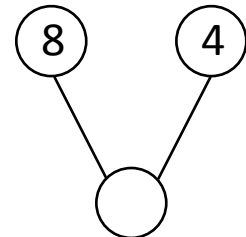
b)

9

iii)



c)

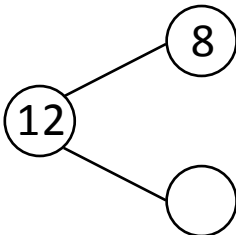


iv) There are 9 children
standing in one row and
6 children standing in
another row. How many
children are standing
there?

d)

13

v)



e)

