



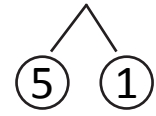
NAME \_\_\_\_\_

DATE \_\_\_\_\_

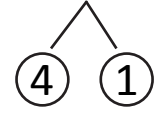
## MATCH THE FOLLOWING

Match the number sentences to the bonds you used to help you make a ten.

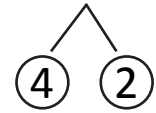
1. a)  $5 + 6 = \underline{\quad}$



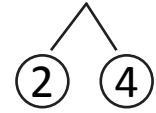
b)  $\underline{\quad} = 8 + 6$



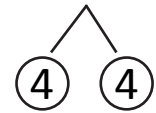
c)  $6 + 6 = \underline{\quad}$



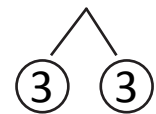
d)  $\underline{\quad} = 5 + 9$



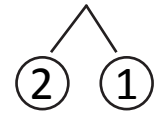
2. a)  $7 + 6 = \underline{\quad}$



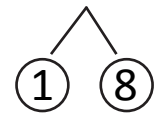
b)  $\underline{\quad} = 9 + 9$



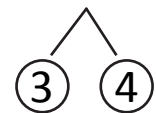
c)  $8 + 3 = \underline{\quad}$



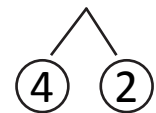
d)  $\underline{\quad} = 6 + 8$



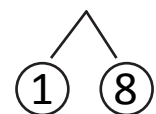
3. a)  $6 + 6 = \underline{\quad}$



b)  $\underline{\quad} = 7 + 7$



c)  $8 + 8 = \underline{\quad}$



d)  $\underline{\quad} = 9 + 9$

