



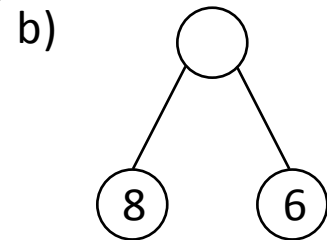
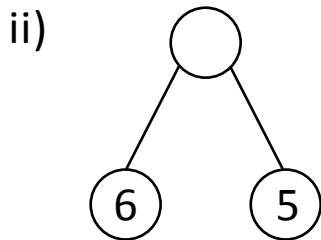
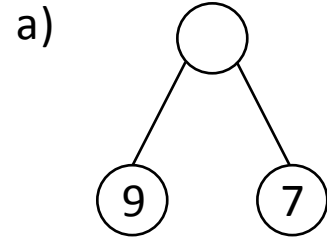
NAME _____

DATE _____

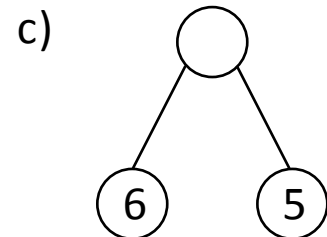
MATCH THE FOLLOWING

Match the following.

i) John has 8 balls and Mike has 6 balls. How many balls do they have in all?



iii)

$$_ + 7 = 16$$


iv) Alice made 4 clay toys and 9 paper toys. How many toys she made altogether?

