



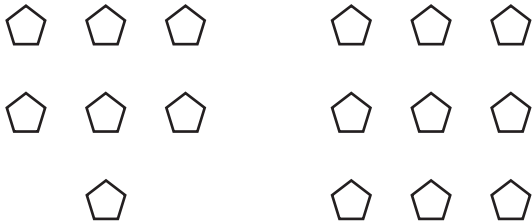
NAME _____

DATE _____

ADDITIONS

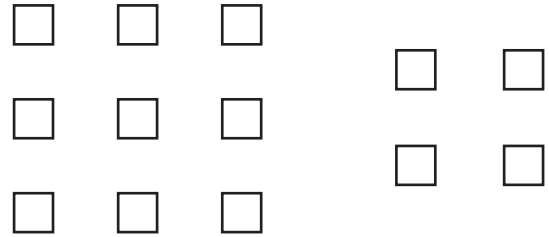
Change the picture to make a ten. Write the easier number sentence and solve.

1. $7 + 9$



$$10 + \underline{\quad} = \underline{\quad}$$

2. $9 + 4$



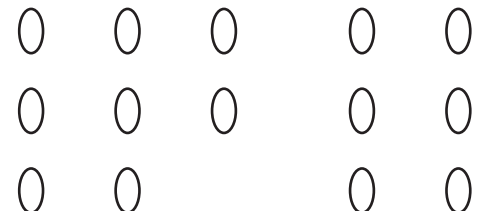
$$10 + \underline{\quad} = \underline{\quad}$$

3. $6 + 5$




$$10 + \underline{\quad} = \underline{\quad}$$

4. $8 + 6$



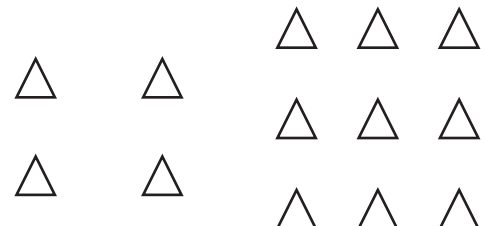
$$10 + \underline{\quad} = \underline{\quad}$$

5. $5 + 7$



$$10 + \underline{\quad} = \underline{\quad}$$

6. $4 + 9$



$$10 + \underline{\quad} = \underline{\quad}$$