



NAME _____

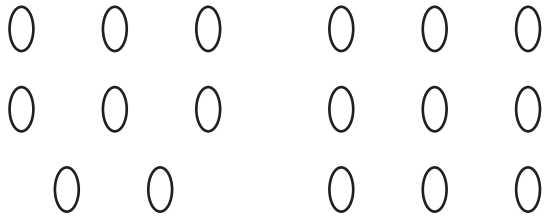
DATE _____

ADDITIONS

Change the picture to make a ten. Write the easier number sentence and solve.

1.

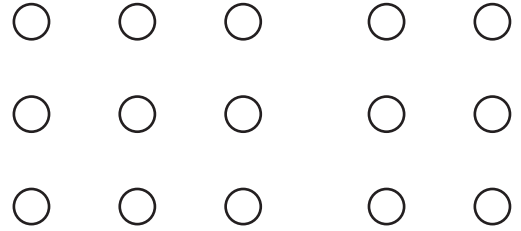
$8 + 9$



$10 + \underline{\quad} = \underline{\quad}$

4.

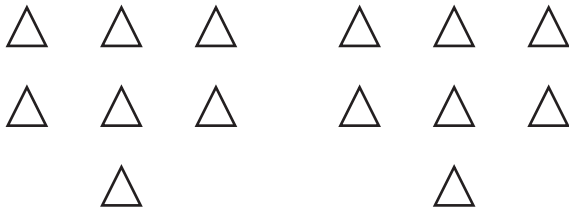
$9 + 6$



$10 + \underline{\quad} = \underline{\quad}$

2.

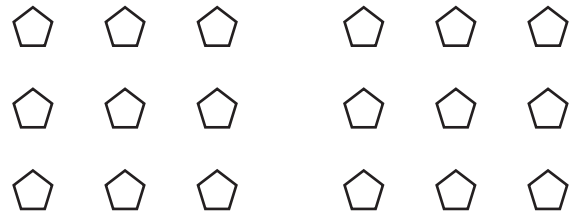
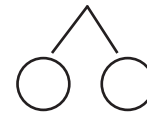
$7 + 7$



$10 + \underline{\quad} = \underline{\quad}$

5.


$9 + 9$



$10 + \underline{\quad} = \underline{\quad}$

3.

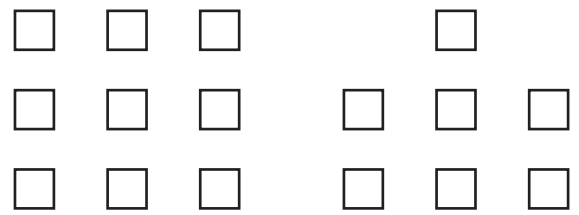
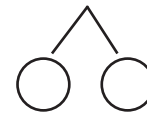
$5 + 8$



$10 + \underline{\quad} = \underline{\quad}$

6.

$9 + 7$



$10 + \underline{\quad} = \underline{\quad}$