



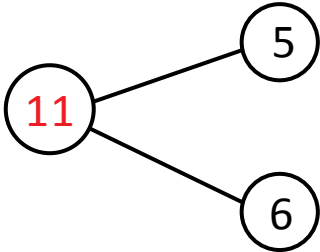
NAME \_\_\_\_\_

DATE \_\_\_\_\_

## ADDITIONS

Solve the following number bonds. Complete the mathematical sentences to make them equal to the given number bond.

Example:

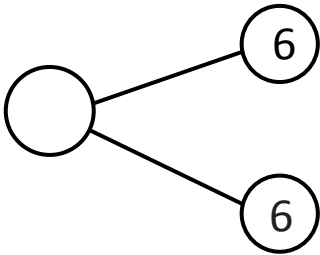


$$6 + \underline{5} = 11$$

$$7 + \underline{4} = 11$$

$$8 + \underline{3} = 11$$

$$9 + \underline{2} = 11$$

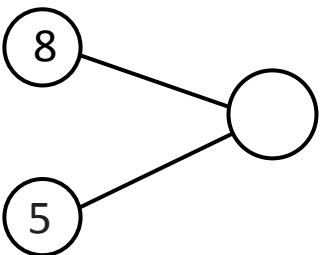


$$6 + \underline{\quad} = 12$$

$$7 + \underline{\quad} = 12$$

$$8 + \underline{\quad} = 12$$

$$9 + \underline{\quad} = 12$$

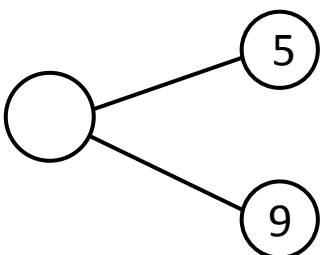


$$6 + \underline{\quad} = 13$$

$$7 + \underline{\quad} = 13$$

$$8 + \underline{\quad} = 13$$

$$9 + \underline{\quad} = 13$$



$$6 + \underline{\quad} = 14$$

$$7 + \underline{\quad} = 14$$

$$8 + \underline{\quad} = 14$$

$$9 + \underline{\quad} = 14$$