



NAME \_\_\_\_\_


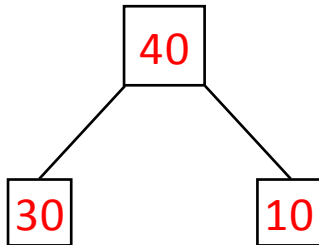
DATE \_\_\_\_\_

## ADDITION (USING QUICK TENS)


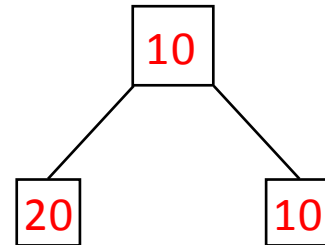
Draw quick tens and a number bond to help you solve the number sentences.

Examples:

a)  $10 + 30 = \underline{40}$



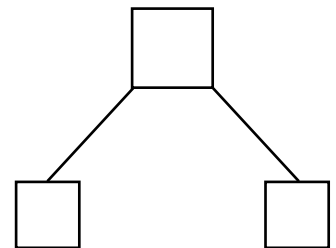
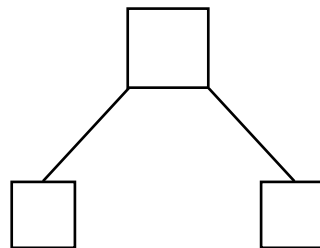
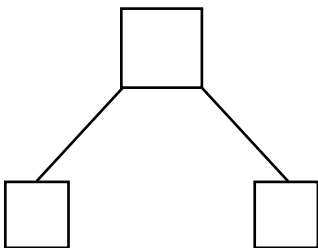
b)  $20 - 10 = \underline{10}$



1)  $10 + 20 = \underline{\quad}$

2)  $10 + 10 = \underline{\quad}$

3)  $20 + 20 = \underline{\quad}$



+

+

+