

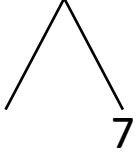


NAME _____ DATE _____

ADDITION OF TWO DIGIT NUMBERS

Solve using number bonds. Write the two number sentences that show that you added the ten first. Draw quick tens and ones.

a) $17 + 14 = \underline{\quad}$

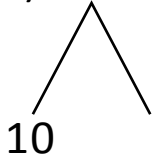


+

$14 + 10 = \underline{\quad}$

$\underline{\quad} + 7 = \underline{\quad}$

b) $11 + 16 = \underline{\quad}$

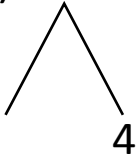


+

$16 + 10 = \underline{\quad}$

$\underline{\quad} + 1 = \underline{\quad}$

c) $14 + 12 = \underline{\quad}$

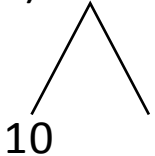


+

$12 + 10 = \underline{\quad}$

$\underline{\quad} + 4 = \underline{\quad}$

d) $13 + 19 = \underline{\quad}$



+

$19 + 10 = \underline{\quad}$

$\underline{\quad} + 3 = \underline{\quad}$