

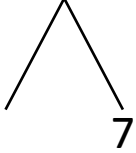


NAME \_\_\_\_\_ DATE \_\_\_\_\_

## ADDITION OF TWO DIGIT NUMBERS

Solve using number bonds. Write the two number sentences that show that you added the ten first. Draw quick tens and ones.

a)  $17 + 15 = \underline{\quad}$

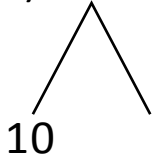


+

$15 + 10 = \underline{\quad}$

$\underline{\quad} + 7 = \underline{\quad}$

b)  $16 + 20 = \underline{\quad}$

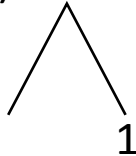


+

$20 + 10 = \underline{\quad}$

$\underline{\quad} + 6 = \underline{\quad}$

c)  $11 + 25 = \underline{\quad}$

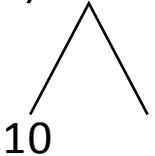


+

$25 + 10 = \underline{\quad}$

$\underline{\quad} + 1 = \underline{\quad}$

d)  $18 + 17 = \underline{\quad}$



+

$17 + 10 = \underline{\quad}$

$\underline{\quad} + 8 = \underline{\quad}$