

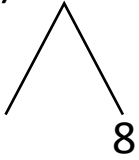


NAME _____ DATE _____

ADDITION OF TWO DIGIT NUMBERS

Solve using number bonds. Write the two number sentences that show that you added the ten first. Draw quick tens and ones.

a) $18 + 15 = \underline{\quad}$

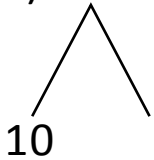


+

$15 + 10 = \underline{\quad}$

$\underline{\quad} + 8 = \underline{\quad}$

b) $19 + 17 = \underline{\quad}$

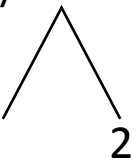


+

$17 + 10 = \underline{\quad}$

$\underline{\quad} + 9 = \underline{\quad}$

c) $12 + 18 = \underline{\quad}$

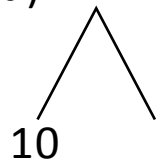


+

$18 + 10 = \underline{\quad}$

$\underline{\quad} + 2 = \underline{\quad}$

d) $14 + 25 = \underline{\quad}$



+

$25 + 10 = \underline{\quad}$

$\underline{\quad} + 4 = \underline{\quad}$