



NAME _____

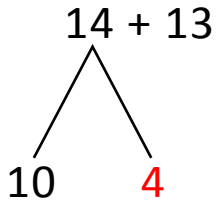
DATE _____

ADDITION OF TWO DIGIT NUMBERS

Solve using quick ten drawing, number bonds and the arrow way.

Example:

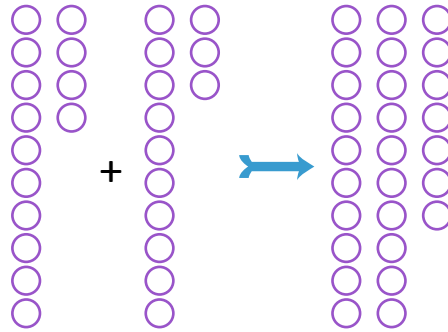
Number bond:



$$13 + 10 = \underline{23}$$

$$\underline{23} + 4 = \underline{27}$$

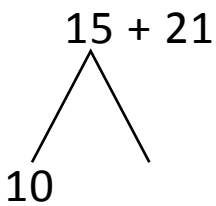
Quick ten drawings:



Arrow way:

$$\underline{13} \xrightarrow{+10} \underline{23} \xrightarrow{+4} \underline{27}$$

a) Number bond:



$$21 + 10 = \underline{\quad}$$

$$\underline{\quad} + 5 = \underline{\quad}$$

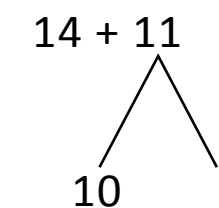
Quick ten drawings:



Arrow way:

$$\underline{21} \xrightarrow{+10} \underline{\quad} \xrightarrow{+5} \underline{36}$$

b) Number bond:



$$14 + 10 = \underline{\quad}$$

$$\underline{\quad} + 1 = \underline{\quad}$$

Quick ten drawings:



Arrow way:

$$\underline{14} \xrightarrow{+10} \underline{24} \xrightarrow{+1} \underline{25}$$