

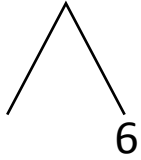


NAME \_\_\_\_\_ DATE \_\_\_\_\_

## ADDITION OF TWO DIGIT NUMBERS

Solve using number bonds. Write the two number sentences that show that you added the ten first. Draw quick tens and ones.

a)  $24 + 16 = \underline{\quad}$

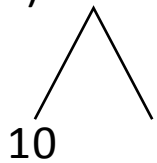


+

$24 + 10 = \underline{\quad}$

$\underline{\quad} + 6 = \underline{\quad}$

b)  $11 + 21 = \underline{\quad}$

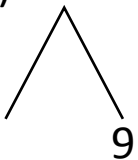


+

$21 + 10 = \underline{\quad}$

$\underline{\quad} + 1 = \underline{\quad}$

c)  $19 + 20 = \underline{\quad}$

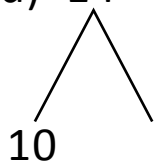


+

$20 + 10 = \underline{\quad}$

$\underline{\quad} + 9 = \underline{\quad}$

d)  $14 + 24 = \underline{\quad}$



+

$24 + 10 = \underline{\quad}$

$\underline{\quad} + 4 = \underline{\quad}$