

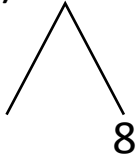


NAME _____ DATE _____

ADDITION OF TWO DIGIT NUMBERS

Solve using number bonds. Write the two number sentences that show that you added the ten first. Draw quick tens and ones.

a) $18 + 11 = \underline{\quad}$

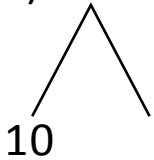


+

$11 + 10 = \underline{\quad}$

$\underline{\quad} + 8 = \underline{\quad}$

b) $16 + 17 = \underline{\quad}$

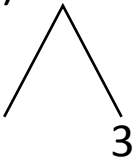


+

$17 + 10 = \underline{\quad}$

$\underline{\quad} + 6 = \underline{\quad}$

c) $13 + 11 = \underline{\quad}$

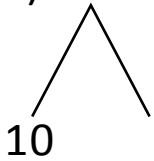


+

$11 + 10 = \underline{\quad}$

$\underline{\quad} + 3 = \underline{\quad}$

d) $15 + 11 = \underline{\quad}$



+

$11 + 10 = \underline{\quad}$

$\underline{\quad} + 5 = \underline{\quad}$