

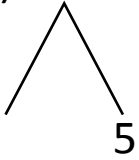


NAME _____ DATE _____

ADDITION OF TWO DIGIT NUMBERS

Solve using number bonds. Write the two number sentences that show that you added the ten first. Draw quick tens and ones.

a) $15 + 12 = \underline{\quad}$

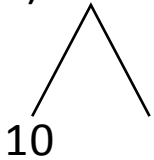


+

$12 + 10 = \underline{\quad}$

$\underline{\quad} + 5 = \underline{\quad}$

b) $13 + 12 = \underline{\quad}$

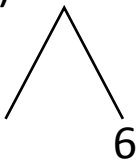


+

$12 + 10 = \underline{\quad}$

$\underline{\quad} + 3 = \underline{\quad}$

c) $16 + 12 = \underline{\quad}$

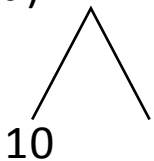


+

$12 + 10 = \underline{\quad}$

$\underline{\quad} + 6 = \underline{\quad}$

d) $11 + 27 = \underline{\quad}$



+

$27 + 10 = \underline{\quad}$

$\underline{\quad} + 1 = \underline{\quad}$