



NAME _____

DATE _____

ADDING ONE MORE

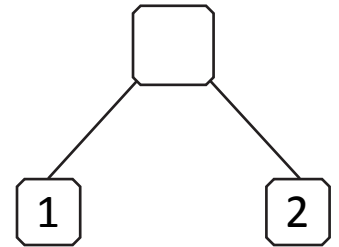
Imagine adding 1 more object to the group. Then write the numbers to match how many objects there will be.

1)




1 more than 2 is ____.

____ + 1 = ____

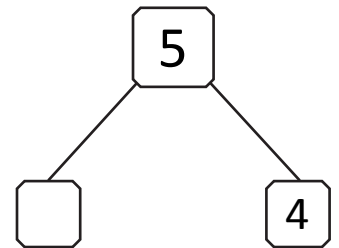


2)



1 more than 4 is ____.

____ + 1 = ____

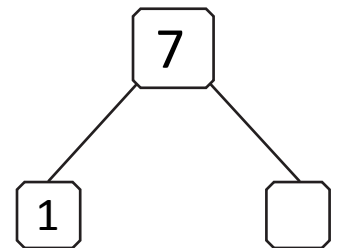


3)



1 more than 6 is ____.

____ + 1 = ____



4)



1 more than 8 is ____.

____ + 1 = ____

