





NAME _____

DATE _____

ADDITION SENTENCES

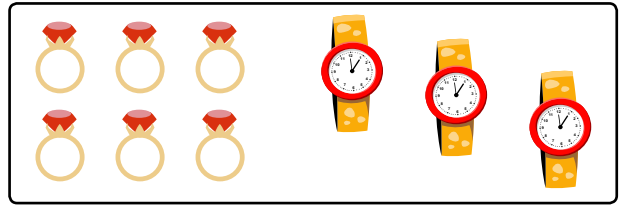

Write an expression that in the given groups the number of objects are equal or not, if so write an equal sign between the groups.

1)



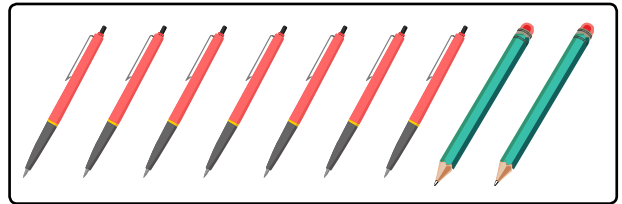

$$\boxed{3} + \boxed{} \quad \bigcirc \quad \boxed{} + \boxed{5}$$

2)




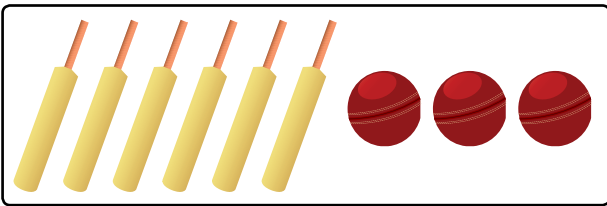
$$\boxed{4} + \boxed{} \quad \bigcirc \quad \boxed{} + \boxed{3}$$

3)



$$\boxed{4} + \boxed{} \quad \bigcirc \quad \boxed{} + \boxed{2}$$

4)



$$\boxed{} + \boxed{3} \quad \bigcirc \quad \boxed{2} + \boxed{}$$