





NAME \_\_\_\_\_

DATE \_\_\_\_\_

## ADDITION SENTENCES



Write an expression that in the given groups the number of objects are equal or not, if so write an equal sign between the groups.

1)





$$\boxed{5} + \boxed{\phantom{0}} \quad \bigcirc \quad \boxed{\phantom{0}} + \boxed{6}$$

2)




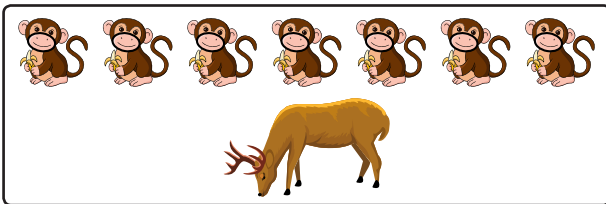
$$\boxed{\phantom{0}} + \boxed{4} \quad \bigcirc \quad \boxed{5} + \boxed{\phantom{0}}$$

3)



$$\boxed{4} + \boxed{\phantom{0}} \quad \bigcirc \quad \boxed{\phantom{0}} + \boxed{3}$$

4)



$$\boxed{\phantom{0}} + \boxed{1} \quad \bigcirc \quad \boxed{5} + \boxed{\phantom{0}}$$