

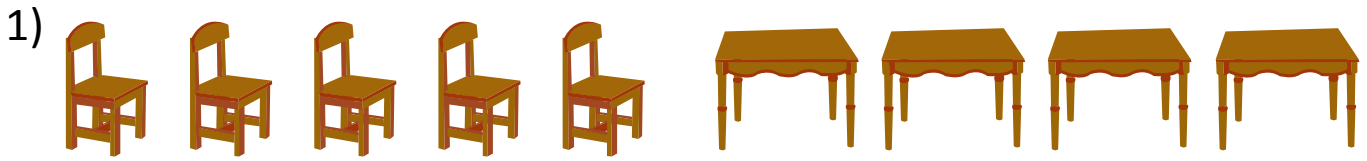


NAME _____

DATE _____

ADDITION SENTENCES

Applying commutative laws to know the basic knowledge.


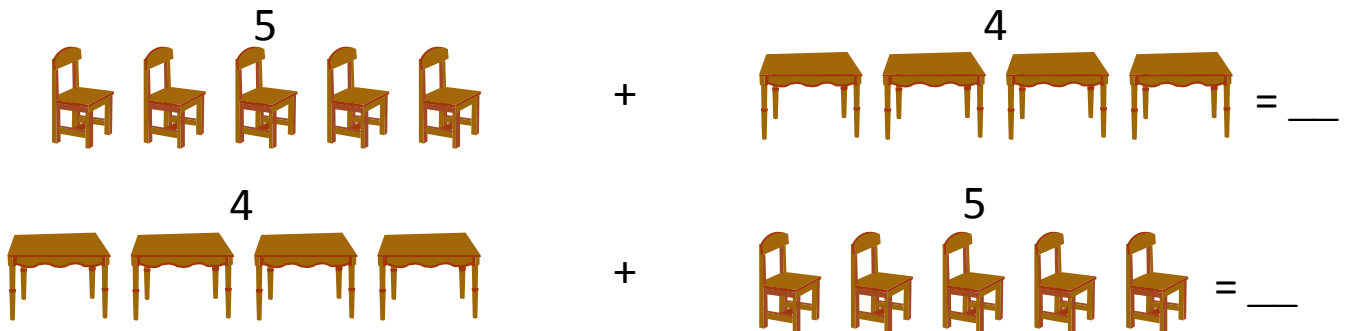


a) Write at least two different sentences in addition using 5, 4 and 9 that describe the picture.

$$5 + 4 = 9$$

$$4 + _ = _$$

b) How are these number sentences the same? Explain using pictures and numbers.



a) Write at least two different sentences in addition using 6, 2 and 8 that describe the picture.

$$6 + _ = 8$$

$$2 + _ = 8$$

b) How are these number sentences the same? Explain using pictures and numbers.

