



NAME _____


DATE _____

ADDITIONS - ADDING ONE MORE

Write the number that is 1 more.

Examples:


a)

	5
---	---


b)

7	8
---	---


1)

	
---	--

7)

	
--	--

2)

	
---	--


8)

6	
---	--


3)

1	
---	--


9)

	
--	--


4)

	
---	--

10)

	
--	--


5)

	
---	--


11)

4	
---	--

6)

	
---	--

12)

	
--	--