



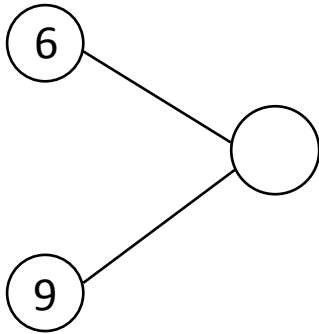
NAME _____

DATE _____

ADDITIONS

Solve the following number bonds. Complete the mathematical sentences to make them equal to the given number bond.

a)



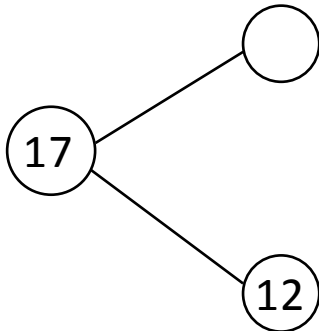
$6 + \underline{\quad} = 15$

$7 + \underline{\quad} = 15$

$8 + \underline{\quad} = 15$

$9 + \underline{\quad} = 15$

b)



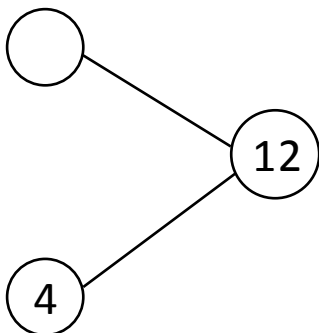
$5 + \underline{\quad} = 17$

$6 + \underline{\quad} = 17$

$7 + \underline{\quad} = 17$

$8 + \underline{\quad} = 17$

c)



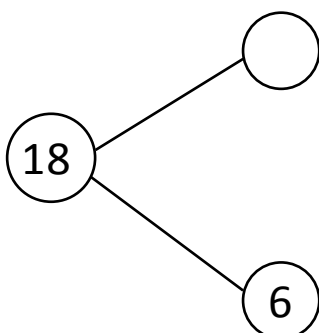
$4 + \underline{\quad} = 12$

$5 + \underline{\quad} = 12$

$6 + \underline{\quad} = 12$

$7 + \underline{\quad} = 12$

d)



$6 + \underline{\quad} = 18$

$7 + \underline{\quad} = 18$

$8 + \underline{\quad} = 18$

$9 + \underline{\quad} = 18$