




NAME _____

DATE _____


ADDITIONS - ADDING ONE MORE

Write the number that is 1 more.

1)

	
---	--

7)

	
--	--

2)

7	
---	--


8)

8	
---	--


3)

5	
---	--


9)

	
---	--

4)

	
---	--

10)

	
--	--

5)

4	
---	--


11)

3	
---	--

6)

6	
---	--

12)

	
--	--