




NAME _____

DATE _____


ADDITIONS - ADDING ONE MORE

Write the number that is 1 more.

1)

	
---	--


7)

	
--	--


2)

7	
---	--

8)

	
--	--


3)

	
--	--


9)

17	
----	--

4)

	
---	--


10)

	
--	--

5)

4	
---	--

11)

	
---	--

6)

6	
---	--

12)

10	
----	--