




NAME \_\_\_\_\_

DATE \_\_\_\_\_

# WAYS TO MAKE 9!

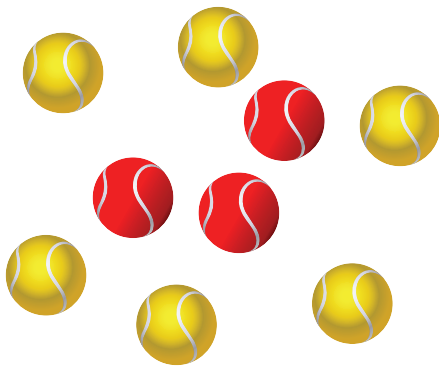
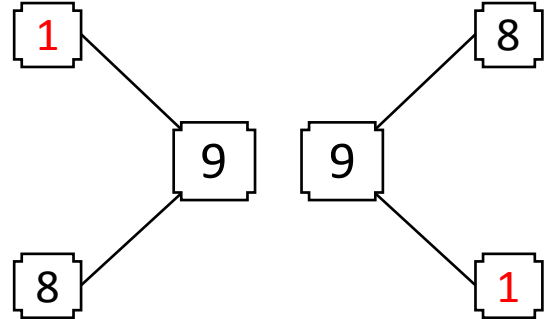
Use the picture to help you write all of the different ways to make 9.

Example:




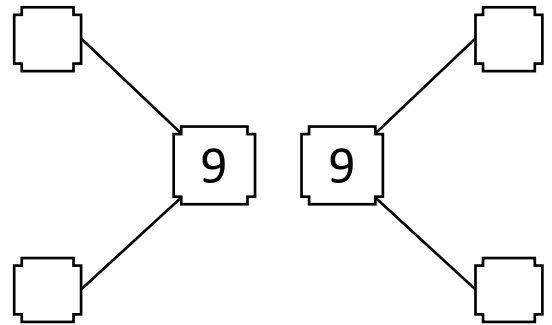
$$\boxed{8} + \boxed{1}$$

$$\boxed{1} + \boxed{8}$$




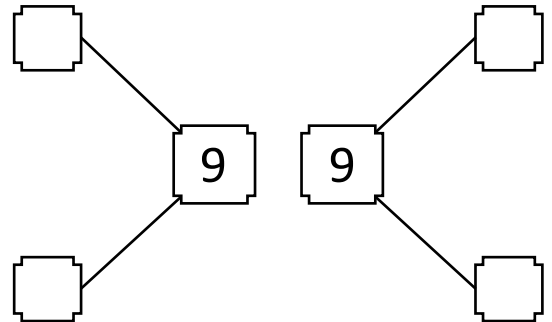
$$\boxed{6} + \boxed{\phantom{0}}$$

$$\boxed{3} + \boxed{\phantom{0}}$$



$$\boxed{9} + \boxed{\phantom{0}}$$

$$\boxed{0} + \boxed{\phantom{0}}$$



$$\boxed{5} + \boxed{\phantom{0}}$$

$$\boxed{4} + \boxed{\phantom{0}}$$

