



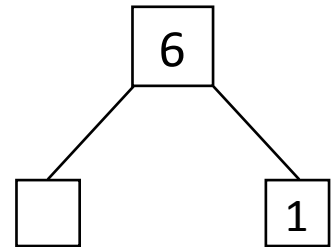
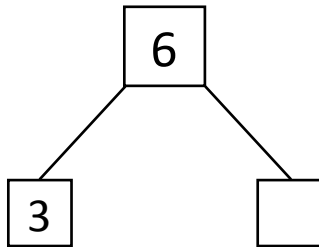
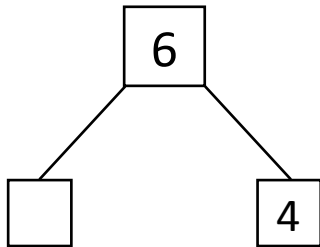
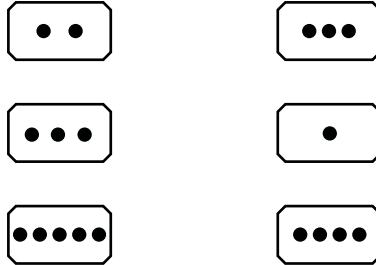
NAME _____

DATE _____

WAYS TO MAKE 6!

Showing number bonds according to matching the numbers.

1) Match the dots to show different ways to make 6. Then draw a number bond for each pair.

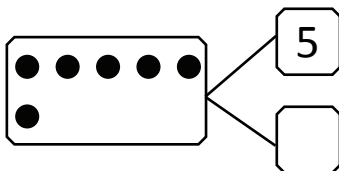


2) Show 2 ways to make 6. Use the number bonds above for help.

$$\square + 4$$

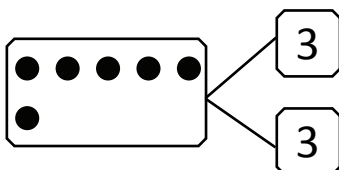
$$3 + \square$$

3) Fill in the missing number in the number bond. Write 2 addition sentences for the number bond you made. Notice where the equal sign is, to make your sentences true.



$$5 + \square = 6$$

$$6 = 1 + \square$$



$$6 = \square + 3$$

$$3 + 3 = 6$$