



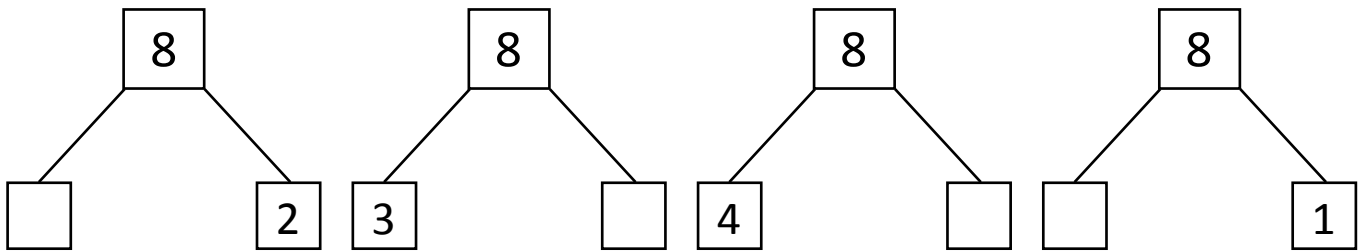
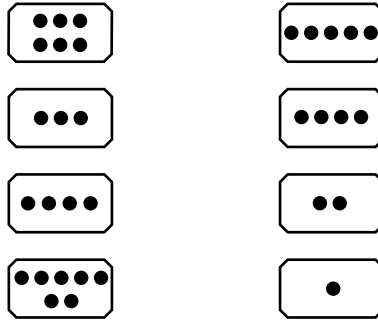
NAME \_\_\_\_\_

DATE \_\_\_\_\_

## WAYS TO MAKE 8!

Showing number bonds according to matching the numbers.

1) Match the dots to show different ways to make 8. Then draw a number bond for each pair.

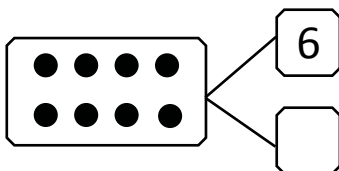


2) Show 2 ways to make 8. Use the number bonds above for help.

$$\square + \square = 5$$

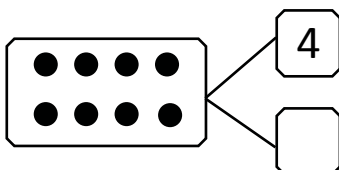
$$\square + \square = 1$$

3) Fill in the missing number in the number bond. Write 2 addition sentences for the number bond you made. Notice where the equal sign is, to make your sentences true.



$$6 + \square = 8$$

$$8 = 2 + \square$$



$$4 + \square = 8$$

$$8 = \square + 4$$