



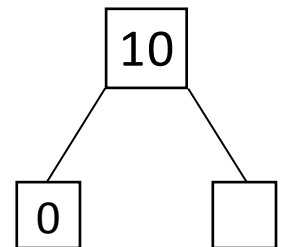
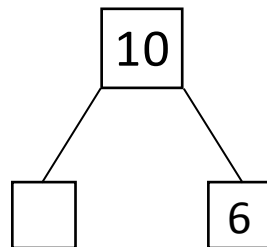
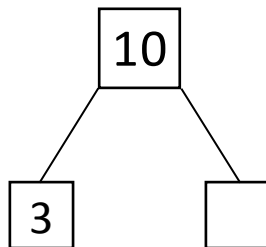

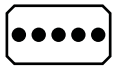
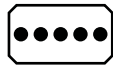
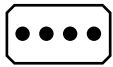


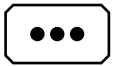
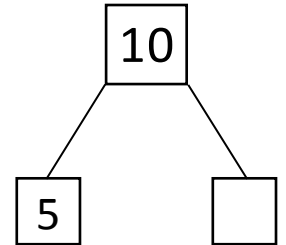
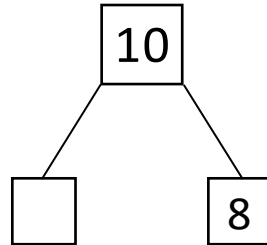
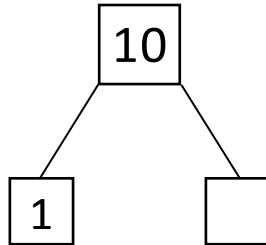

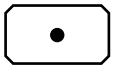
NAME _____

DATE _____

WAYS TO MAKE 10!

Showing number bonds according to matching the numbers.

1) Match the dots to show different ways to make 10. Then draw a number bond for each pair.

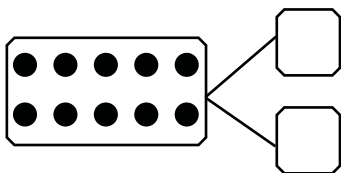


2) Show 2 ways to make 10. Use the number bonds above for help.

$$\square + 7$$

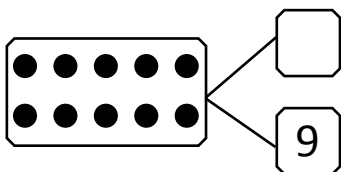
$$\square + 6$$

3) Fill in the missing number in the number bond. Write 2 addition sentences for the number bond you made. Notice where the equal sign is, to make your sentences true.



$$2 + \square = 10$$

$$10 = 8 + \square$$



$$1 + \square = \square$$

$$10 = 9 + \square$$