



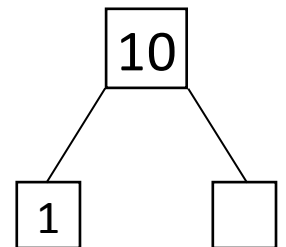
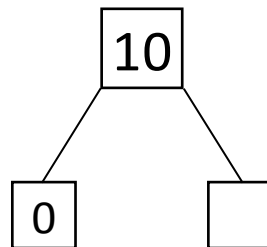
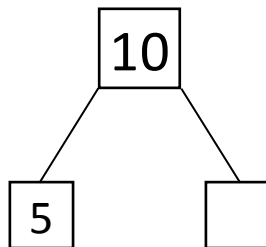


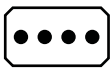
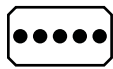




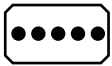
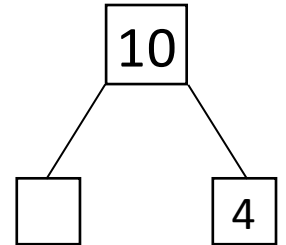
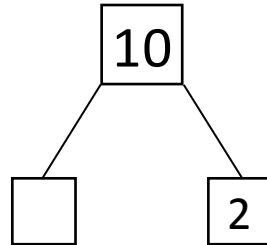
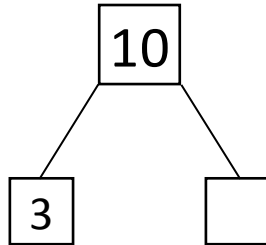

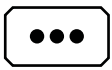
NAME _____

DATE _____

WAYS TO MAKE 10!

Showing number bonds according to matching the numbers.

1) Match the dots to show different ways to make 10. Then draw a number bond for each pair.

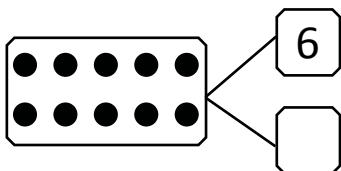


2) Show 2 ways to make 10. Use the number bonds above for help.

$$\boxed{} + \boxed{7}$$

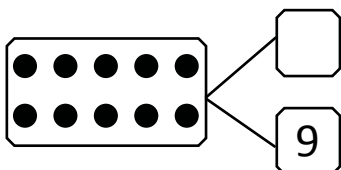
$$\boxed{} + \boxed{8}$$

3) Fill in the missing number in the number bond. Write 2 addition sentences for the number bond you made. Notice where the equal sign is, to make your sentences true.



$$\boxed{6} + \boxed{4} = \boxed{}$$

$$\boxed{10} = \boxed{4} + \boxed{}$$



$$\boxed{1} + \boxed{9} = \boxed{}$$

$$\boxed{10} = \boxed{9} + \boxed{}$$