







NAME _____

DATE _____

WAYS TO MAKE 6!

Match the followings to show the partners of 6.



Then write a number bond for each partner.

