






NAME _____

DATE _____

WAYS TO MAKE 9!

Match the followings to show the partners of 9.



Then write a number bond for each partner.

